


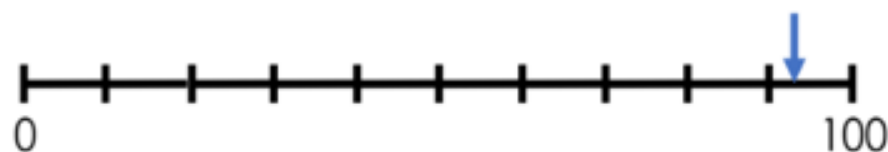
Number lines

Show the position of **328** on each number line.



Estimate

Estimate the position of the arrow.



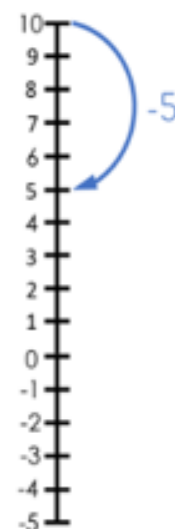
Spot the pattern

5 less than 10 is **5**

5 less than 7 is ____

5 less than 4 is ____

5 less than 1 is ____



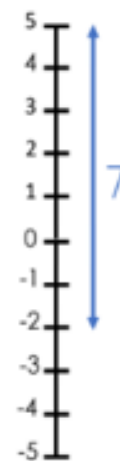
I know... so...

The difference between **-2** and **5** is **7**

The difference between **-2** and **4** is ____

The difference between **-3** and **4** is ____

The difference between **-3** and ____ is **9**



Explain the mistakes

What is 245 rounded to the nearest 10?

Mistake 1: 50

Mistake 2: 240

Mistake 3: 200

I know... so...

678 rounded to the nearest ____ is **680**

678 rounded to the nearest 100 is _____

295 rounded to the nearest 10 is _____

295 rounded to the nearest 100 is _____

True or false?

IV = 15

XIX = 21

XII = 12

IV = 4

True or false?

XL = 60

CII = 100

XXV = 115

XL = 40

Order

Order the numbers from smallest to largest.

VIII

C

XX

XVI