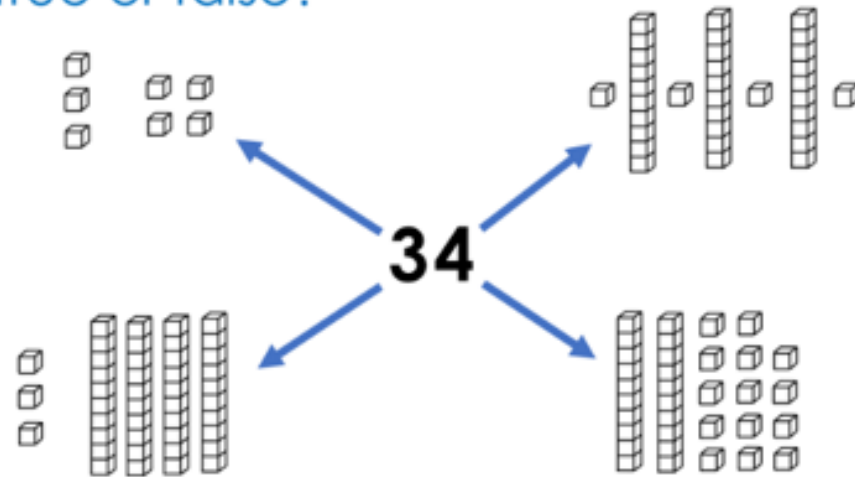


True or false?



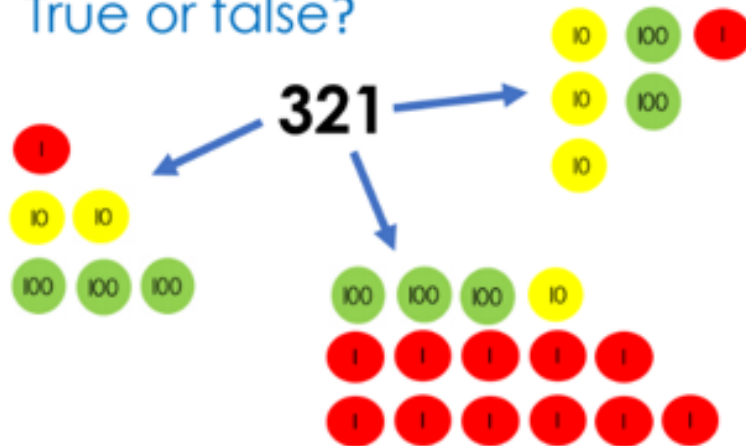
Which answer?

Which number is 10 more than 396?

- (a) 496
- (b) 386
- (c) 406

Explain your choice

True or false?



Which answer?

Ten more than a number is 2696.
What is the number?

- (a) 2706
- (b) 2686

Explain your choice

Different ways

To turn **180** into **210** you can...

add ___ tens

OR add ___ ones

OR add ___ tens and ___ ones

OR add ___ hundred and subtract ___ tens

Different ways

To turn **2940** into **3000** you can...

add ___ tens

OR add ___ ones


OR add ___ tens and ___ ones

OR add ___ hundred and subtract ___ tens

How many ways?

You have a pile of 100 coins and a pile of 10 coins.

Make 230



Level 1: I can find a way

Level 2: I can find different ways

Level 3: I know how many ways there are

How many ways?

You have a pile of 1000 coins and a pile of 100 coins.

Make 4100



Level 1: I can find a way

Level 2: I can find different ways

Level 3: I know how many ways there are